

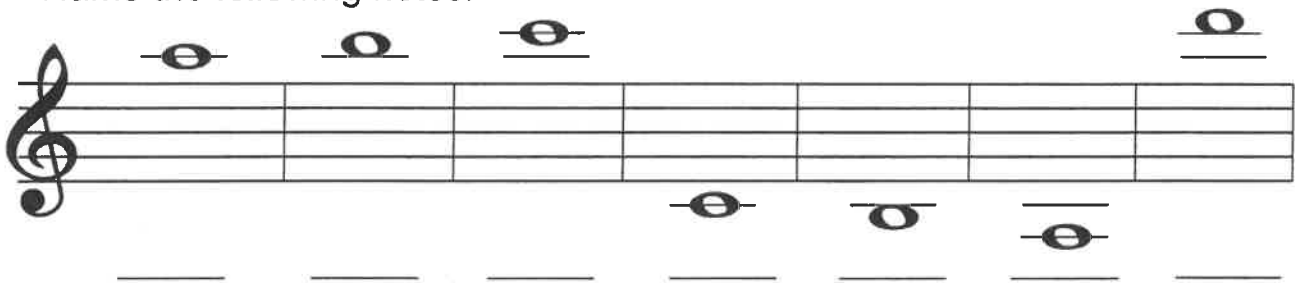
NAME _____

LESSON 8


A ledger line is a line added above or below the staff to extend the staff.
Notice the notes step up or down "space-line-space-line".



Name the following notes.



2. Name the following intervals.




3. Going UP from the given note, draw the interval named below each measure. Add ledger lines as needed.



Unison 7th 4th 6th 3rd 8ve 5th

4. Going DOWN from the given note, draw the interval named below each measure. Add ledger lines as needed.



6th 5th 8ve 2nd 3rd 4th unison